







1. Write the answer to the combination your teacher says.



2. Draw the minute hand to show the time.



7:00



7:15



7:30

3. Listen as your teacher reads the story problem.


Three bees buzzed around a big flower. One bee flew away. How many bees were left?

Write the combination.

$$\square - \square = \square$$



1. Circle the dimes you need to buy the ice cream.



2. Add or subtract.

$6 + 2 = \square$

$4 + 4 = \square$

$3 + 4 = \square$

$2 + 1 = \square$

$2 + 5 = \square$

$4 + 2 = \square$

$2 - 1 = \square$

$10 - 10 = \square$

$6 - 1 = \square$

3. Read the number and draw that many shapes.

four ★

seven ●

two ■

eight ▲

two ○

five ■