


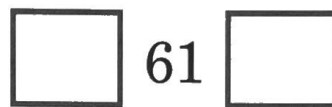




1. Write the number your teacher says.



2. Write the *before* and *after* numbers.



3. Add.

$$\begin{array}{r} 0 \\ + 4 \\ \hline \square \end{array}$$

$$\begin{array}{r} 5 \\ + 2 \\ \hline \square \end{array}$$

$$\begin{array}{r} 3 \\ + 3 \\ \hline \square \end{array}$$


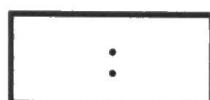


$$\begin{array}{r} 8 \\ + 1 \\ \hline \square \end{array}$$

$$\begin{array}{r} 2 \\ + 4 \\ \hline \square \end{array}$$

$$\begin{array}{r} 3 \\ + 2 \\ \hline \square \end{array}$$

$$\begin{array}{r} 4 \\ + 3 \\ \hline \square \end{array}$$

4. What time is it?



Fun with Numbers

Count and write how many mice are wearing each color shirt.

