






1. Write by 10s to 100.



2. Circle the number that tells how many.



30    23    33



20    25    30

3. Add or subtract.

$2 + 2 = \square$

$3 + 3 = \square$

$4 + 4 = \square$

$5 + 4 = \square$

$2 + 3 = \square$

$2 + 4 = \square$

$2 + 5 = \square$

$2 + 6 = \square$

$6 - 1 = \square$

$7 - 7 = \square$

$9 - 1 = \square$

$3 - 3 = \square$