






1. Fill in the \bigcirc under each animal that is more than 1 inch long.



\bigcirc



\bigcirc



\bigcirc

2. Add or subtract.

$$\begin{array}{r} 1 \\ + 1 \\ \hline \square \end{array}$$

$$\begin{array}{r} 2 \\ - 1 \\ \hline \square \end{array}$$

$$\begin{array}{r} 1 \\ + 2 \\ \hline \square \end{array}$$

$$\begin{array}{r} 3 \\ - 1 \\ \hline \square \end{array}$$

$$\begin{array}{r} 1 \\ + 3 \\ \hline \square \end{array}$$

$$\begin{array}{r} 4 \\ - 1 \\ \hline \square \end{array}$$

$$\begin{array}{r} 3 \\ + 0 \\ \hline \square \end{array}$$

$$\begin{array}{r} 3 \\ - 3 \\ \hline \square \end{array}$$

$$\begin{array}{r} 7 \\ + 0 \\ \hline \square \end{array}$$

$$\begin{array}{r} 7 \\ - 7 \\ \hline \square \end{array}$$

$$\begin{array}{r} 5 \\ + 0 \\ \hline \square \end{array}$$

$$\begin{array}{r} 5 \\ - 5 \\ \hline \square \end{array}$$