





1. Write the number that comes before.



2. Write the numbers.

three

one

ten

five

eight

seven

3. Add.

$2 + 4 = \square$

$3 + 2 = \square$

$4 + 3 = \square$

$0 + 2 = \square$

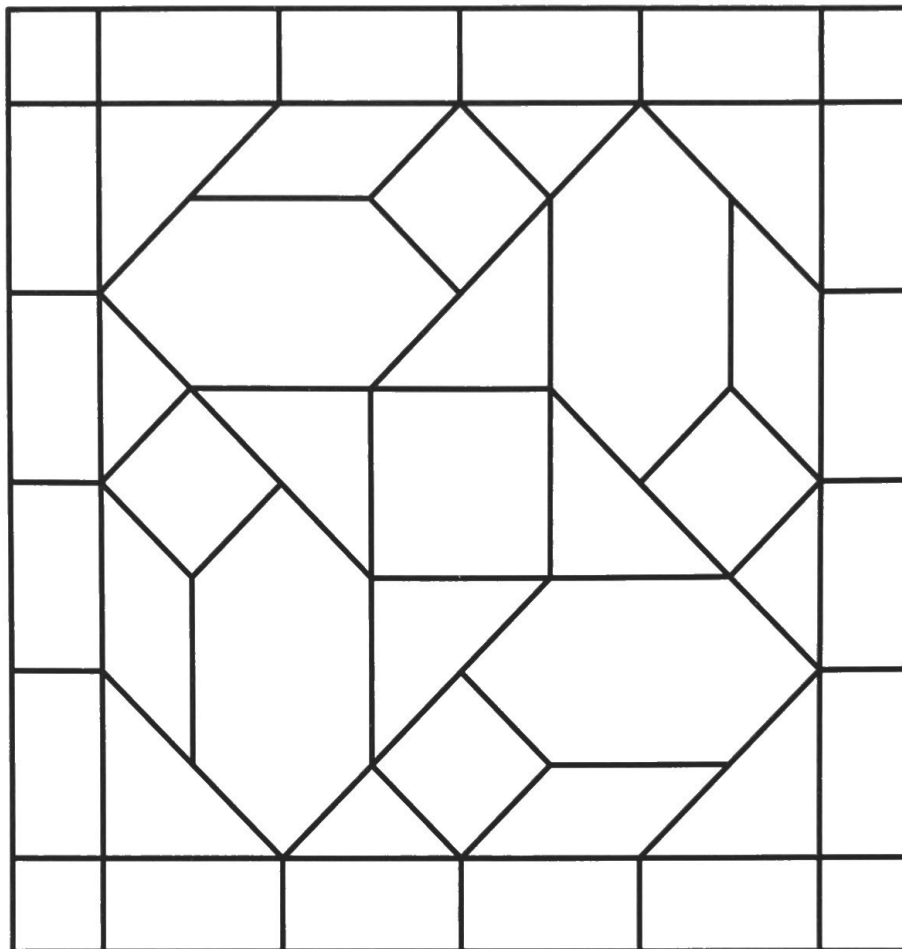

$8 + 1 = \square$

$2 + 5 = \square$

4. Circle 35¢.



5. Color the shapes using the color key to make a design.



---

## Oral Numbers Evaluation

Grade

1. Give the answers:

$3 + 3 = \underline{\quad}$      $5 + 2 = \underline{\quad}$      $3 + 4 = \underline{\quad}$

$1 + 3 = \underline{\quad}$      $5 + 0 = \underline{\quad}$      $2 + 4 = \underline{\quad}$

2. Give the *before* and *after* numbers for *two* of these three numbers:

    80    

    37    

    54